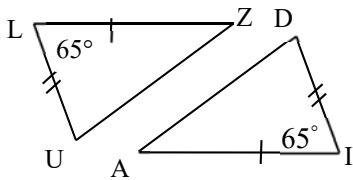


**First Proofs**

Name \_\_\_\_\_

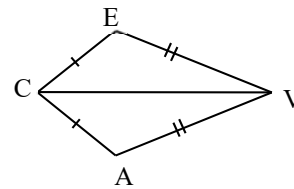
Block \_\_\_\_\_ Date \_\_\_\_\_

1.



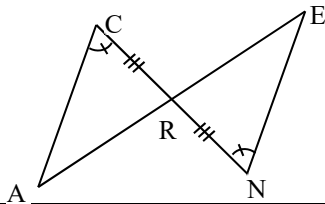
Statement	Reason
$\overline{LZ} \cong \overline{AI}$	
$\angle L \cong$ _____	
$\overline{LU} \cong$ _____	
$\Delta LUZ \cong$ _____	

2.



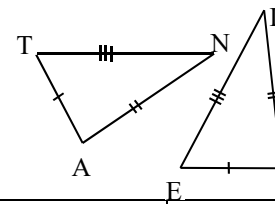
Statement	Reason
$\overline{CE} \cong$ _____	
$\overline{CV} \cong$ _____	
_____ $\cong$ _____	
$\Delta CAV \cong$ _____	

3.



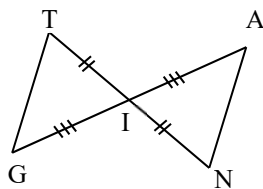
Statement	Reason
$\angle C \cong$ _____	
$\overline{CR} \cong$ _____	
_____ $\cong$ _____	
$\Delta ARC \cong$ _____	

4.



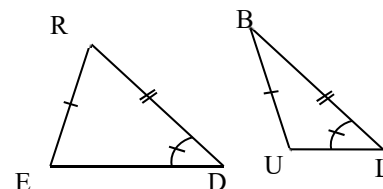
Statement	Reason
$\overline{TA} \cong$ _____	
$\overline{TN} \cong$ _____	
_____ $\cong$ _____	
$\Delta ANT \cong$ _____	

5.



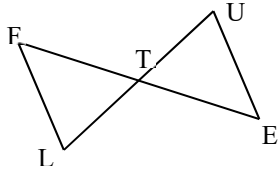
Statement	Reason
$\overline{TI} \cong$ _____	
$\overline{NI} \cong$ _____	
_____ $\cong$ _____	
$\Delta GIT \cong$ _____	

6.



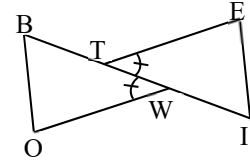
Statement	Reason
$\overline{ER} \cong$ _____	
$\overline{RD} \cong$ _____	
_____ $\cong$ _____	
$\Delta RED \cong$ _____	

7. T is the midpoint of both  $\overline{FE}$  and  $\overline{LU}$ .



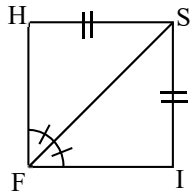
Statement	Reason
_____ $\cong$ _____	_____
_____ $\cong$ _____	_____
_____ $\cong$ _____	_____
$\triangle FTL \cong$ _____	_____

8.  $\overline{BW} \cong \overline{ET}$  and  $\overline{OW} \cong \overline{IT}$



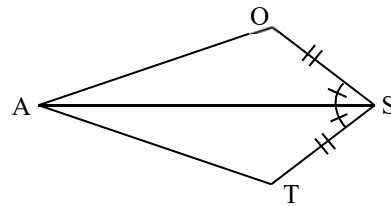
Statement	Reason
$\overline{BW} \cong$ _____	_____
$\overline{OW} \cong$ _____	_____
_____ $\cong$ _____	_____
$\triangle BOW \cong$ _____	_____

9.



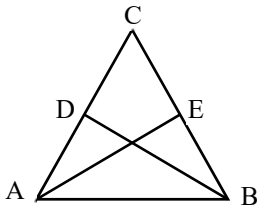
Statement	Reason
_____ $\cong$ _____	_____
_____ $\cong$ _____	_____
_____ $\cong$ _____	_____
$\triangle FSH \cong$ _____	_____

10.



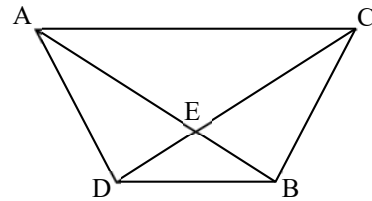
Statement	Reason
_____ $\cong$ _____	_____
_____ $\cong$ _____	_____
_____ $\cong$ _____	_____
$\triangle SAT \cong$ _____	_____

11.  $\overline{AC} \cong \overline{BC}$  and  $\overline{CE} \cong \overline{CD}$



Statement	Reason
_____ $\cong$ _____	_____
_____ $\cong$ _____	_____
_____ $\cong$ _____	_____
$\triangle ACE \cong$ _____	_____

12.  $\overline{AB} \cong \overline{CD}$  and  $\overline{AD} \cong \overline{BC}$



Statement	Reason
_____ $\cong$ _____	_____
_____ $\cong$ _____	_____
_____ $\cong$ _____	_____
$\triangle ABD \cong$ _____	_____