

Increasing, Decreasing and Constant Worksheet

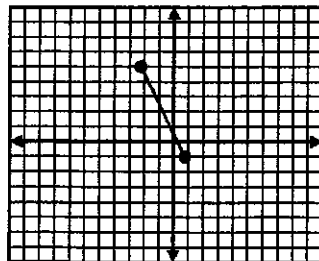
Name: _____

Date: _____ Per: _____

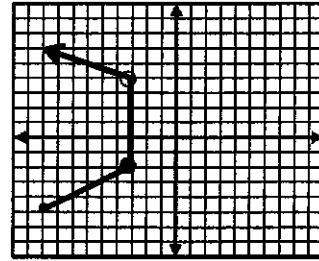
For each problem:

- State if function is continuous, if there is a discontinuity state type and where the discontinuity exists.
- State the interval that the function is increasing, decreasing or constant

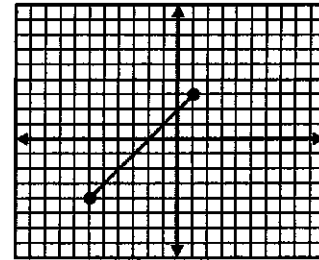
1.



2.



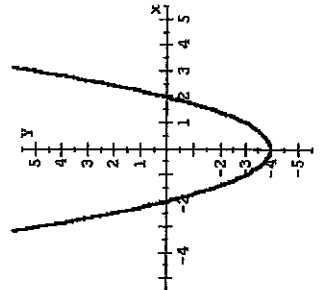
3.



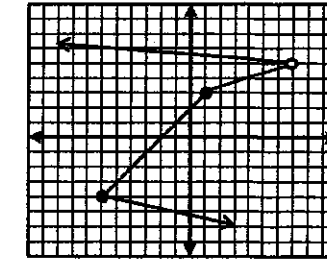
a. _____

b. _____

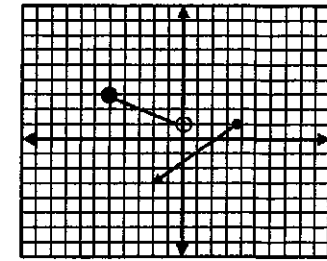
4.



5.



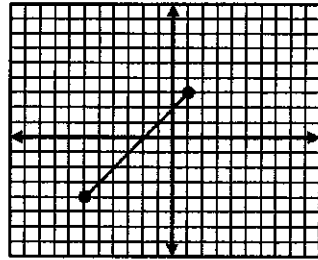
6.



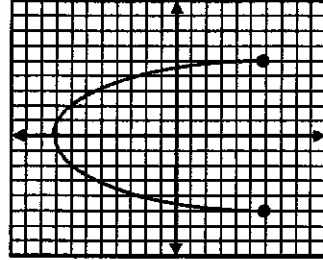
a. _____

b. _____

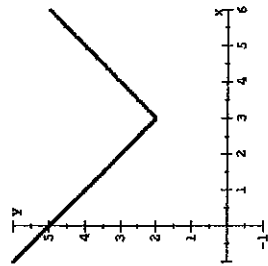
7.



8.



9.



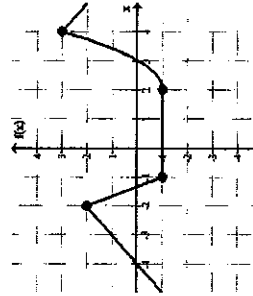
a. _____

b. _____

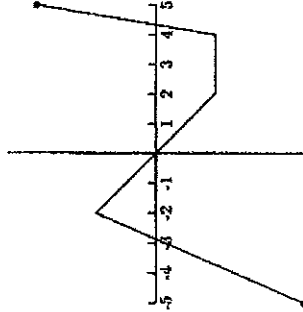
a. _____

b. _____

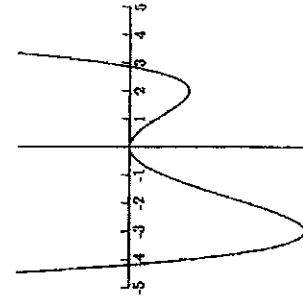
10.



11.



12.



a. _____

b. _____

a. _____

b. _____