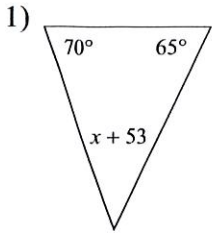
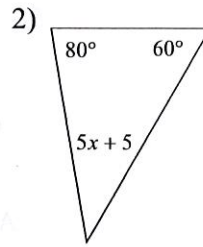


Solve for x.

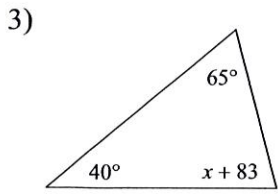


- A) -12 B) -8
C) -10 D) -5

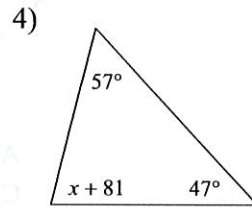


- A) -8 B) -6
C) 7 D) -1

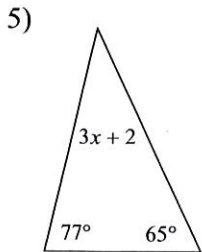
DO EVEN
'S FRONT &
BACK



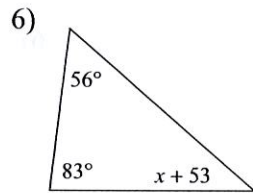
- A) -8 B) -4
C) -6 D) -10



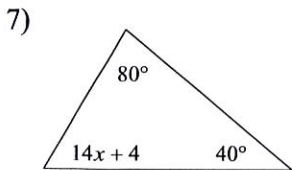
- A) -5 B) 8
C) 9 D) 5



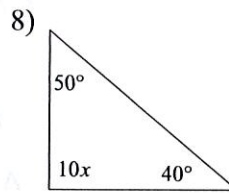
- A) 4 B) -12
C) 12 D) -7



- A) 5 B) -12
C) -8 D) 12



- A) -3 B) 4
C) -10 D) -11



- A) -4 B) 9
C) -8 D) 6



Geometry

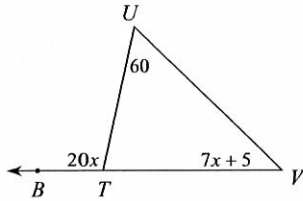
Name _____

Assignment

Date _____ Period _____

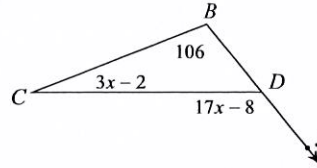
Solve for x .

1)



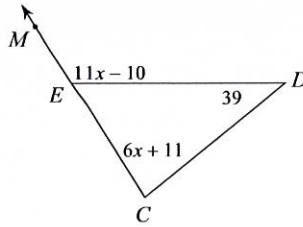
- A) 15 B) 6
C) 5 D) 8

2)



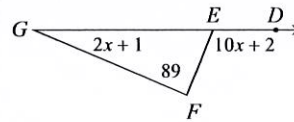
- A) 6 B) 12
C) 8 D) 11

3)



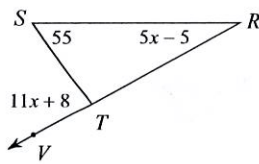
- A) 15 B) 11
C) 12 D) 13

4)



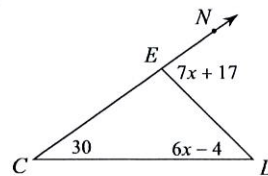
- A) 11 B) 9
C) 10 D) 15

5)



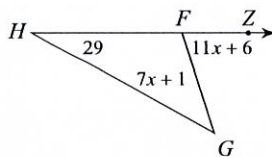
- A) 7 B) 3
C) 2 D) 10

6)



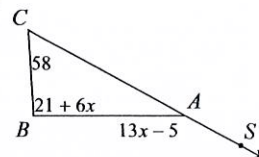
- A) 9 B) 13
C) 14 D) 7

7)



- A) 6 B) 2
C) 7 D) 11

8)



- A) 7 B) 2
C) 12 D) 3



Answers

Front/ Exterior

1) C

2) C

3) C

4) A

5) A

6) A

7) A

8) C

Back/ Interior

1) B

2) C

3) A

4) A

5) C

6) B

7) B

8) B

